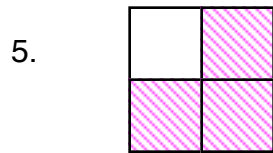

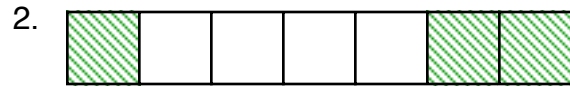


Fractions as Part of a Whole

Part I — Identify the fraction represented by the shaded portion.



Part II — Identify the fraction represented by the unshaded portion.

Part III — Combine the shaded and unshaded portions together. What fraction would it be?
Convert this fraction to lowest terms?